






# Whale Sharks

## Order

Whale sharks can dive down to 4,000 feet (1,200 m) under water. The five whale sharks are swimming at different levels. Read the sentences and make them true. Can you put the whale sharks in order so that every sentence is true?



**Problem 1** -Make these sentences true.

1. C is at the bottom.
2. E swims above C and below D.
3. A swims 2,000 feet (600 m) below D.
4. D swims below B.

**Problem 1** -Put the whale sharks in order.

0 feet	(0 m)	Whale ____
1,000 feet	(300 m)	Whale ____
2,000 feet	(600 m)	Whale ____
3,000 feet	(900 m)	Whale ____
4,000 feet	(1,200 m)	Whale ____

**Problem 2** -Make these sentences true.

1. A swims above B and D.
2. E swims below B.
3. C swims 1,000 feet (300 m) above A.
4. B swims below D.
5. B swims 3,000 feet (900 m) below C.

**Problem 2** -Put the whale sharks in order.

0 feet	(0 m)	Whale ____
1,000 feet	(300 m)	Whale ____
2,000 feet	(600 m)	Whale ____
3,000 feet	(900 m)	Whale ____
4,000 feet	(1,200 m)	Whale ____